




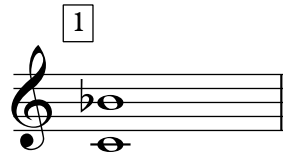
NAVN: _____

INTERVALLER


Benævn intervallerne!




Svar: "5" eller "kvint"



Svar: _____




Svar: _____




Svar: _____

TONARTER


Angiv tonearterne i dur, ud fra disse faste fortegn!




Svar: G-dur



Svar: _____



Svar: _____




Svar: _____

BECIFRINGER/AKKORDER

Noter akkorderne ud fra becifringerne!


Eksempel

Gm⁷




1

E^bΔ




2

E⁷(b⁹)



3


Am⁷(b⁵)




Bemærk basnøgle!


Angiv becifringerne ud fra de noterede akkorder (i grundform)!


Eksempel 1



Svar: Fm7  Svar: _____

2 3



Svar: _____  Svar: _____

Bemærk basnøgle!

SKALAER

Navngiv skalaerne!

Eksempel



Svar: F dorisk

1




Svar: _____

2



Svar: _____

3



Svar: _____

4



Svar: _____

Bemærk basnøgle!

5



Svar: _____

Bemærk basnøgle!